

Name: _____


Fractions


Directions: Color the box(es) that represent the fraction.

1. Color $\frac{1}{3}$ green 

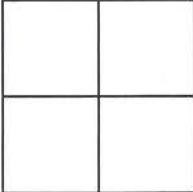
2. Color $\frac{1}{4}$ yellow 

3. Color $\frac{1}{2}$ red and $\frac{1}{2}$ blue 

4. Color $\frac{2}{3}$ purple 

5. Color $\frac{1}{8}$ brown 

6. Color $\frac{3}{5}$ orange 

7. Color $\frac{3}{4}$ pink 

Name: _____

ANSWER KEY

Fractions

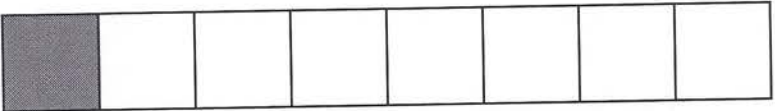
Directions: Color the box(es) that represent the fraction.

1. Color $\frac{1}{3}$ green 

2. Color $\frac{1}{4}$ yellow 

3. Color $\frac{1}{2}$ red and $\frac{1}{2}$ blue 

4. Color $\frac{2}{3}$ purple 

5. Color $\frac{1}{8}$ brown 

6. Color $\frac{3}{5}$ orange 

7. Color $\frac{3}{4}$ pink 